



# REID'S AMAZING WORD PROBLEM BOOK



# Multiplication Problems

1. There are 4 balloons in each row there are 9 rows how many in all?



2. There are 12 planes at the airport there are 3 rows how many in all?



3. Santa made 30 toys for the first 3 kids on his list how many toys are there in all?



4. Reid saw a usher with 8 rows with 8 seats in each row how many seats are in all



5. Jack bought three boxes of cookies with 12 cookies in each box, how many cookies are in total



6. Max made 7 stick figures it takes 4 sticks to make one stick figure how many sticks did he use?



# Division

1. Jeb had 44 dollars he split it with Hank, how much did they each get?



2. Reid had 60 cupcakes, he wanted to split the cupcakes with 5 friends, how many cupcakes did each friend get ?



3. A farmer has 20 watermelons and wants to display them in groups of 2 at the farmers market, how many watermelons are in each group?



4. Dad had 12 t-shirts he put them in 2 piles, how many shirts are in each pile?



5. Dad had 20 cufflinks that he put in two equal piles, how many are in each pile ?



6. Mark had 15 pencils he put an equal amount of them in 3 pencil cases, how many are in each pencil case?

# Fractions

1. Joe and phil had a fish for dinner, phil ate  $\frac{7}{10}$  of the fish, joe ate  $\frac{3}{10}$ th of the same fish how much of the fish did they eat?



2. Brian had a ice cream cone with 14 scopes of ice Cream he ate  $\frac{1}{2}$  of the ice Cream cone how many scopes were left?



3. Nate has  $\frac{1}{5}$  of a pizza pie left, how much did eat ?



4. Mom pulled the blinds down  $\frac{1}{3}$  of the way, how much of the window can she see out now



5. Steve has 25 lab Tops and their are 100 students, what fraction of students don't have them ?




6. Jake has 10 baseball cards, phil has  $\frac{1}{5}$  of the amount jake has , how many cards phil have?



# multi-step

1. Doug has 33 boxes of juice containers he split them equally with 3 friends, then takes 2 away from each friend. How many does each friend have now?



2. Rand has 70 bags of chips, her brother stole 20 bags then gave 55 bags to her, how many does she now have?



3. Jamie had 26 dynamite sticks, 12 exploded and he put the left over sticks in groups of 2, how many sticks were in each group?



# Answer key

---

M1-26		D1-22		F1-1
M2-36		D2-12		F2-7
M3-90		D3-10		F3-4/5
M4-64		D4-6		F4-2/3
M5-36		D5-10		F5-3/4
M6-28		D6-5		F6-2

---

MS1-8		MS2-105		MS3-7
-------	--	---------	--	-------