



MELANIE'S MULTIPICATION, DIVISION, AND FRACTION WORD PROBLEM MATH BOOK



Multiplication word problems

1. There are 5 rows of 12 shoes in my closet. How many shoes do I have?



2. There are 6 rows of cats in the shelter 9 in each row. How many cats do I have?



3. There are 7 rows with 8 bags in each row at the store. How many bags do I have?



4. There are 5 rows with 6 basketballs at the gym. How many basketballs do I have?



5. There are 7 rows with 4 cups in each row at the party. How many cups are there at the party?



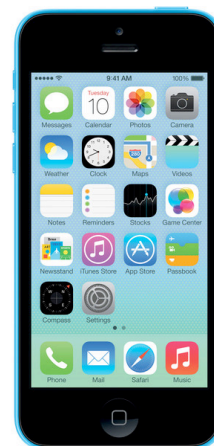
6. There are 5 rows of books with 6 books in each row, at the bookstore. How many books do I have?



7. There are 9 rows with 7 notebooks from school in each row. How many notebooks do I have?



8. There are 6 rows with 8 iPhones at the Apple store in each row. How many iPhones do I have?



Division word problems

1 . Olivia has 45 pictures on her wall and she wants to give an equal amount to 9 of her friends. How many pictures does each friend get?



2. I have 72 books I want to give an equal amount to 9 friends. How many does each friend get?



3. I have 50 erasers. I want to give 2 to each teacher. How many teachers get erasers?



4. I have 24 pens. I want to give 6 to each kid in my class. How many kids get pens?



5. I have 60 pencils. I want to give 6 to each cousin. How many cousins get a pencil?



6. I have 42 hair clips. I want give 7 to each person. How many people get a hair clip?



7. I have 40 masks. I want to give 8 to each person. How many people can get 8 masks?




8. I have 60 cards. I want to give 3 cards to each person. How many people can get cards?



Fraction word problems

1. I have a square. I divided it into 60 parts. I gave 25 away. What fraction of the square do I have left?



2. Alana's mom made 25 cupcakes. She gave 8 away. What fraction of cupcakes does she have left?



3. Susan made 100 pictures. She gave 18 to her Daughter. What fraction of the pictures does she have left?



4. Lindsay had 188 lip balms. She lost 25 of them. What fraction of the lip balms does she have now?



5. Jillian's book report was to read 75 pages. She read 25 pages, what fraction of her report did she do?



6. Lillian had 60 fans. She gave away 15. What fraction of the fans does she have now?



7. James had 80 basketballs. He gave away 20 of them. What fraction of the basketballs does he have left?



8. There are 62 kids in a class, 17 are not there. What fraction of the kids are not there?



Two Step Word Problems

1.Holly bought 75 basketballs, she gave away 18 of them. Then she bought 80 more. How many basketballs does Holly have?



2.James has 90 books. He gave away 25 of them. Then bought 70 more. How many books does he have now?



3. Javier had 60 masks, he gave 28 to Xander. Then he bought 85 more. How many does he have now?



4. Xander had 75 friends in the beginning of the year. In the middle of the year he made 25 new friends. Then at the end of the year 28 of his friends moved away. How many friends does he have now?



Answer Key for
multiplication word
problems.

[1] 60

[2] 54

[3] 56

[4] 30

[5] 28

[6] 30

[7] 63

[8] 48

Answer key for
division word
problems

[1] 5

[2] 8

[3] 25

[4] 4

[5] 10

[6] 6

[7] 5

[8] 20

Answer key for
fraction word
problems

[1] $35/60$

[2] $8/25$

[3] $82/100$

[4] $163/188$

[5] $25/75$

[6] $45/60$

[7] $60/80$

[8] $45/62$

Answer key for two-step word problems

[1] 137

[2] 135

[3] 117

[4] 72