


# KFEER'S MULTIPLICATION, DIVISION AND FRACTION WORD PROBLEMS !!!!!



# MULTIPLICATION PROBLEMS


1. There are 5 rows of drums each row has 3 drums how many drums in all?



2. There are 7 rows of cookies each row has 4 cookies how many cookies are in all?



3. There are 4 rows of dots each row has 6 dots how many dots are there in all?



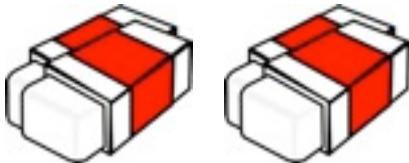
4. There are 2 rows of flowers each row has 2 flowers how many flowers are there in all?



5. There is 1 row of hula hoops it has 21 hula hoops how many hula hoops in all?



6. There are 9 erasers in a pack there are 24 packs how many erasers in all?



7. There are 14 rows each row has 11 ghosts how many ghosts are there in all?



# Division problems

1. There are 20 fish the lady put them in tanks of 2 how many groups of fish are there in all?




2. There are 18 cats the owner put them in cages of 3 how many groups of cats are there?




3 .James bought 35 burgers he split them with 7 friends how many burgers did each person get?



4. MS. Arthur bought 84 paintings she gave 4 paintings she gave 4 paintings to each house on the block how many houses are on the block?



5. Kfeer bought 12 juices for his birthday party he invited 4 people how many juice boxes did each person get.



6. There are 24 aliens 6 of them came to earth, how many aliens came to earth.



# FRATION WORD PROBLEMS

1. There is 60 children in a class 30 children are wearing yellow and 30 are wearing blue what fraction of the class is wearing blue?



2. 20 sodas were left in a fridge 10 had been drank what fraction is left in the fridge?



3. There are 120 pieces of Legos. James took 30 what fraction is left



4. There are 10 cars James buys 2 what fraction of cars is left?



5. There are 200 baseballs Derek Jeter uses 50 what fraction did Derek take?



6. There are 450 cards Kfeer took 200 what fraction of cards did Kfeer take?



# TWO STEP WORD PROBLEMS

1. Kfeer has 56 Legos Jacob borrowed 18. And Brett borrowed 26. how many Legos does Kfeer have left?



2. Xander has 272 comics Javier stole 94. And James gave him 111 comics. How many comics does Xander have in all?



3. James has 39 muffins Kfeer ate 14. And Xander ate 17. How many muffins does James have left?



# ANSWER KEY

## MULTIPLICATION PROBLEMS FRACTION PROBLEMS

1.15                      1.1/2

2.28                      2.1/2

3.24                      3.1/3

4.4                        4.1/5

5.21                      5.1/4

6.24                      6.4/9

7.154

## DIVISION WORD PROBLEMS      MULTI-STEP PROBLEMS

1.10                      1.12

2.6                        2.289

3.5                        3.8

4.21

5.3

6.4