


# Brett's Multiplication, Fraction and Division Word Problems



Division word problems

1 10 kids were selling lemonade. They soled 16 bottles of lemonade.



They made 40 dollars how much money does each kid get?

2 6 friends collected bottle and cans for a center the cashier gave the 24 dollars the friends share the money equally.



How much money did each friend get?

5 My friend Benji had 25 cars he want to share them evenly with 5 friends .how many



cars will each person get?



6 There were 140 erasers and 7 stores if each of the stores wanted erasers. How many erasers would each store recive?

7 Kfeer had 150 pencils he wants to know how many equal groups of pencils he can have. How many can he have?



Multiplication

1 There were 6 packs of pencils on the teacher's desk and there are 3 in each pack  
How many pencils are there in all?



2 Ben had 11 packages of apples. There 7 in each pack. How many apples does ben have in all?



3 David had footballs he had 9 rows of 8 footballs how many footballs does David have?



4 John had 2 bags of apples he had 255 in each bag how apples does he have in all?



5 Brad had 8 bags of 29 apples how many apples does brad have in all?

6 fillip had 59 rows of 28 cars. How many toy cars does he have in all?



7clayton had 34 rows of apples there were 8 in each row how many apples does he have in all?



8 Joey has 5 rows of problems on his paper each row contained 18 problems. How many problems does Joey have in all

## FRACTION

Phillip had 56 bouncy balls he gave away 23 what fraction does he have left?



Sandra got 23 hairbands she gave 17 away what fraction does she have left?



Olivia had 35 shoelaces she gave 19 away what fraction does she have left?




Reid had 134 Lego boxes he gave 23 to Jake what fraction does he have left?



Benji had 37 pillow cases he gave 17 away what fraction does he have left?




Timmy has 27 picture's of this animal he gave 23 away what fraction does he have left?



## 2 step word problems

Luke had 87 jelly beans he gave 16 to Johnny and got 10 more how many more jelly beans does he have



left?

Anders had 56 pieces of paper he gave 7 away and got 10 more how many does he have left?

## Answer KEY

### Division

1 10

2 4

3 9

4 31

5 5

6 18

7 3

8 40

### FRACTION

1 33

2 6

3 16

4 111

5 26

6 4

### MULTIPLICATION